

Key Vocabulary:

Quarter to minutes analogue half past 24 hours
 Quarter past seconds 12 hours digital

Question 1

Write down the time, in words, shown by these analogue clocks.



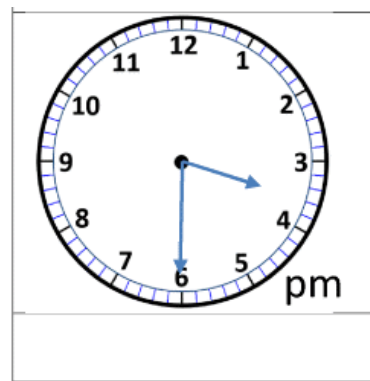
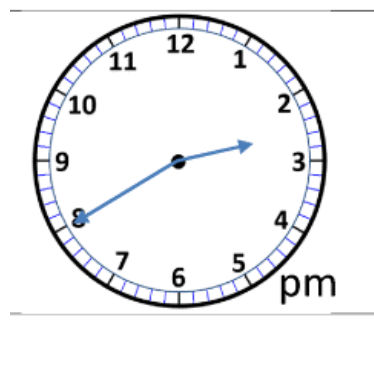
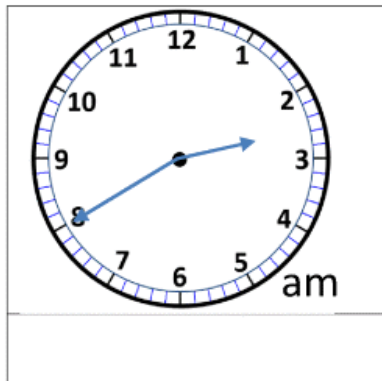
AM



PM

Question 2:

Convert the time on the clock faces into 24 hour times.



Question 3

Convert these 24 hour times into 12 hour times. Don't forget to show AM or PM

24 hour time	12 hour time
17:20	
01:56	
15:25	

Challenge

What time does the clock show...?

1.



50 minutes
after this?

two and half hours
before this time?

2.



35 minutes
after this?

two and a quarter
hours later?